


ORIENTATION OF THE ATLANTA INTERSTATE/ROAD SYSTEM

As you will note from the map of the Metro area depicted above, Atlanta has several freeways running through it. It is of the utmost importance that all Console Operators know the Interstate system in the Metro area and all major highways.

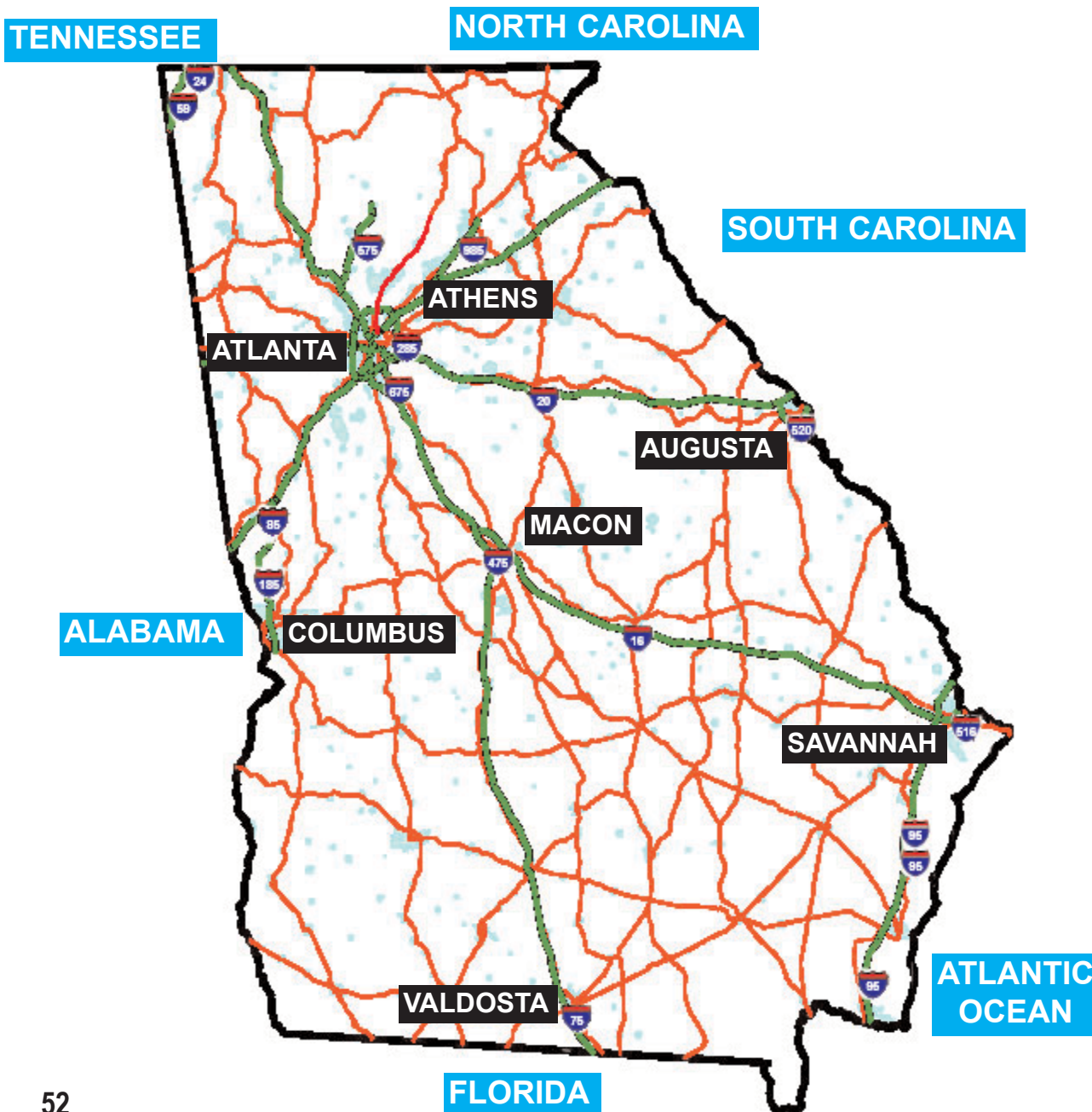
- I-20 runs west/east through the heart of Atlanta
- I-75 runs southeast/northwest
- I-75 merges with I-85 in what is referred to as the Downtown Connector
- I-85 runs southwest/northeast
- I-285 encircles the city
- I-675 joins I-75 with I-285 in the southeast
- GA 400 (Tollway) heads north from I-85 to Alpharetta




ORIENTATION OF GEORGIA INTERSTATE/ HIGHWAY SYSTEM

As a Console Operator you will be mostly concerned with the Metro area, but you will be asked and expected to answer questions about highway conditions for the entire state.

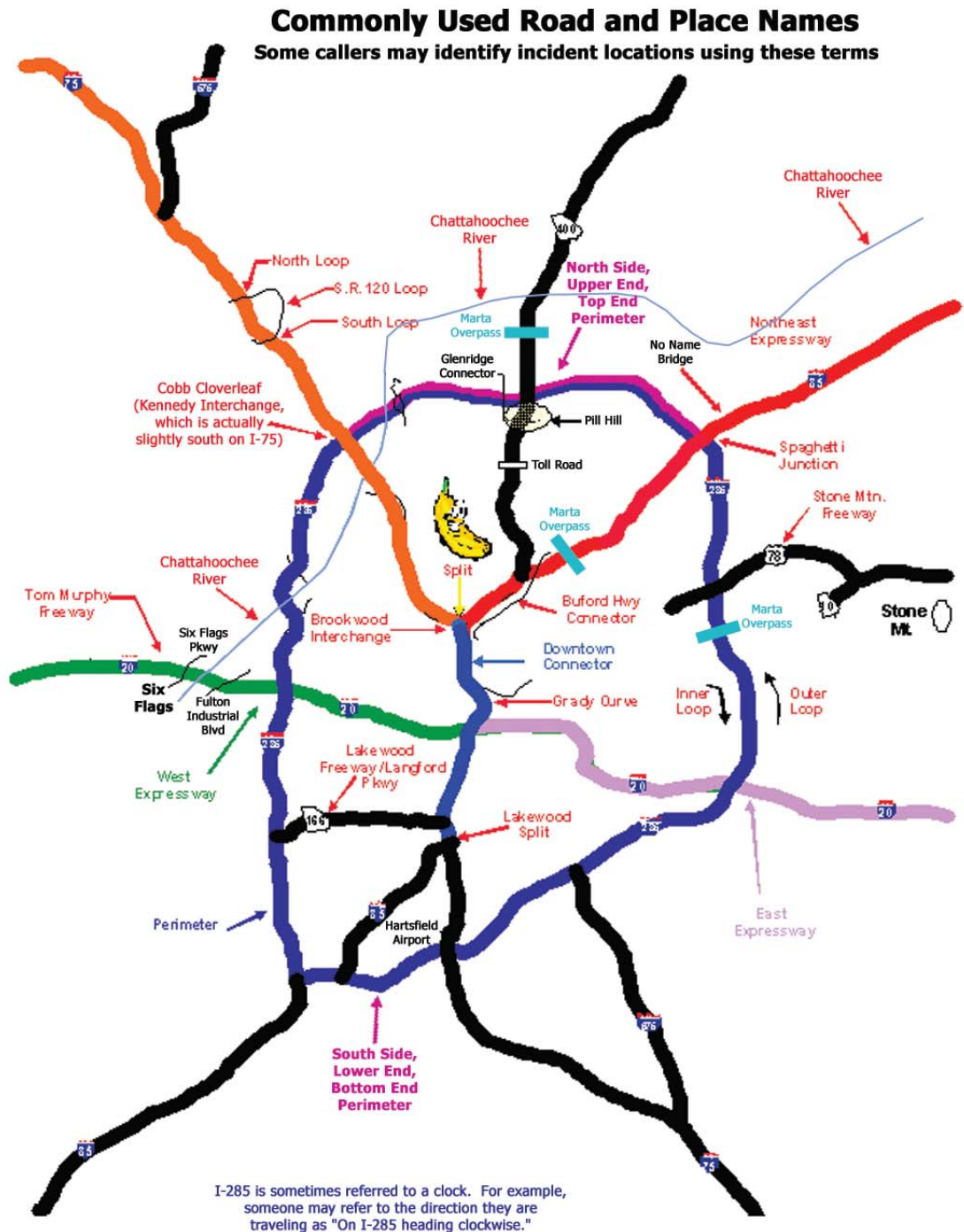
The Console Operator should be familiar with all main highways, major cities and landmarks. The map of Georgia below depicts the major highways and cities.






COMMON ROAD NAMES/TERMINOLOGY

Atlanta motorists will use commonly known names for the various locations that they will describe for you; therefore, it is imperative that you know, if not all, at least the most common.






CAMERA COVERAGE

Camera coverage ends at:

- I-75 at Exit 273 (Wade Green Road) and Exit 235 (Tara Blvd), which in the near future will be changed from Tara Blvd to the Hudson Bridge
- I-85 at GA 316 and Exit 72 (Camp Creek) (southside)
- I-20 at Exit 49 (Fulton Industrial) and Exit 68 (Wesley Chapel)
- I-285 (eastside) current camera coverage going clockwise starting at I-75 N to I-20





CHAPTER TEST

1. Which Interstate does NOT run through the Metro Area of Atlanta?
 - a. I-16
 - b. I-75
 - c. I-285
 - d. I-675

2. What Highway is referred to as "Stone Mountain Highway"?
 - a. Hwy 78
 - b. Hwy 85
 - c. Hwy 166
 - d. Hwy 400

3. How many times does the Chattahoochee River cross I-285?
 - a. 1
 - b. 2
 - c. 3
 - d. 4

4. Where is "Grady Curve" located?
 - a. I-75/I-85 North Junction
 - b. On the Downtown Corridor
 - c. I-75/I-285 Interchange
 - d. Langford Parkway

5. What does the Banana Split refer to?
 - a. I-75/I-85 Interchange on the north side
 - b. I-75/I-85 Interchange on the south side
 - c. I-75/I-285 Interchange on the north side
 - d. I-75/I-285 Interchange on the south side



